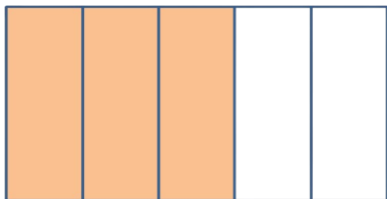


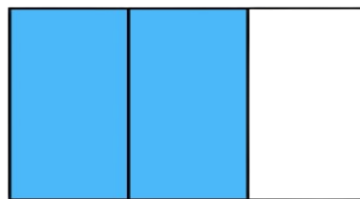



Find the numerator and denominator and write the correct symbol (<, >, =)

1)

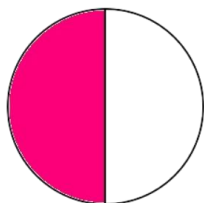


$$\frac{3}{5}$$

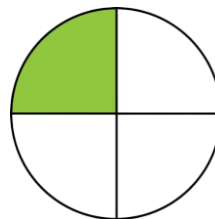


$$\frac{2}{3}$$

2)



$$\frac{\square}{\square}$$

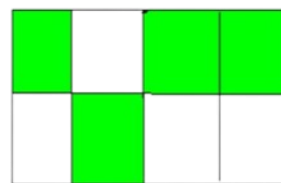


$$\frac{\square}{\square}$$

3)



$$\frac{\square}{\square}$$



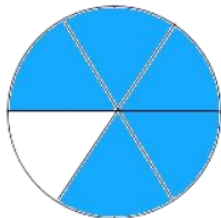
$$\frac{\square}{\square}$$



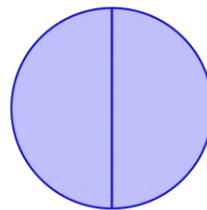


Find the numerator and denominator and write the correct symbol (<, >, =)

4)




$$\frac{\square}{\square}$$

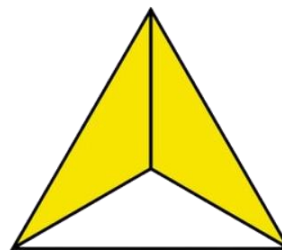


$$\frac{\square}{\square}$$

5)



$$\frac{\square}{\square}$$



$$\frac{\square}{\square}$$

6)



$$\frac{\square}{\square}$$



$$\frac{\square}{\square}$$
