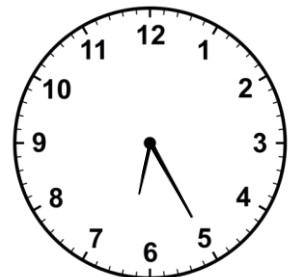
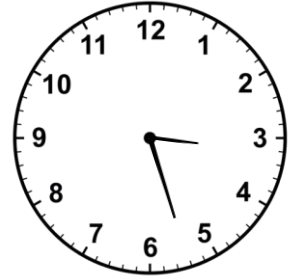





Look at the clock and write the correct time by
using Hours first then the minutes



Eight twenty



Nine thirty five

Six twenty five

Five forty eight

Three twenty seven

Nine thirty

Eleven twelve

Eight twenty

Three ten

One fifty

