



Color and write how many blocks long each given object is




The length of the chocolate bar is 3 blocks long.





The length of the watch is _____ blocks long.



The length of the crayon is _____ blocks long.



The length of the paints is _____ blocks long.



The length of the scissors is _____ blocks long.