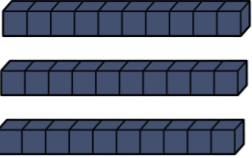
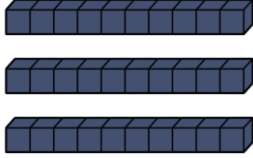

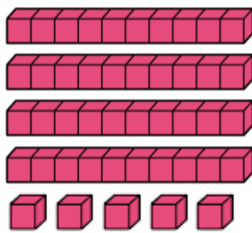

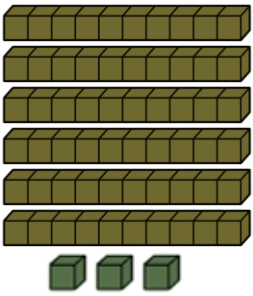

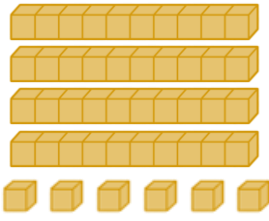


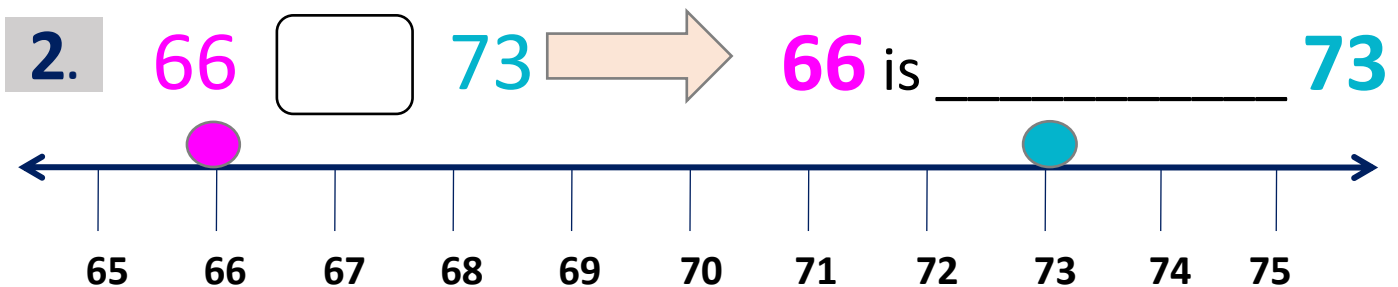
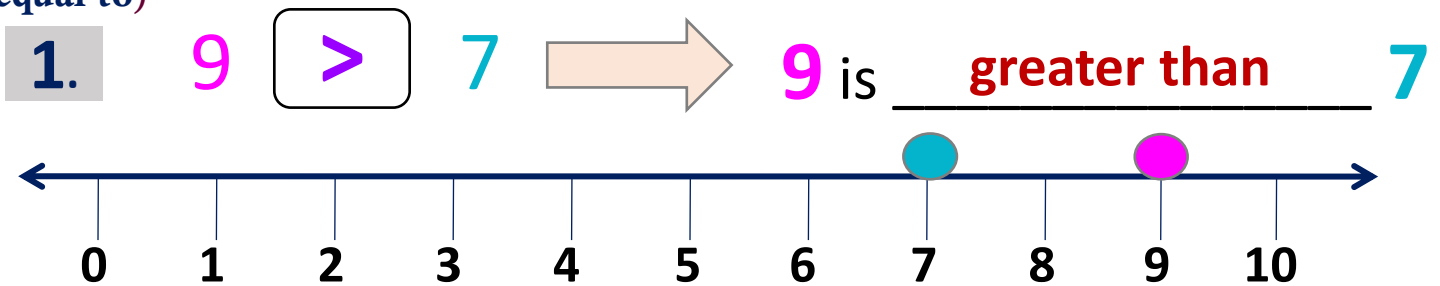


Comparing, Ascending and Descending order – Answer the following questions

1. Count, compare the number of blocks and put the correct symbol (<, >, =)

 <div style="display: inline-block; border: 1px solid black; width: 40px; height: 40px; text-align: center; vertical-align: middle;">=</div> 	 <div style="display: inline-block; border: 1px solid black; width: 40px; height: 40px; text-align: center; vertical-align: middle;"></div> 
 <div style="display: inline-block; border: 1px solid black; width: 40px; height: 40px; text-align: center; vertical-align: middle;"></div> 	 <div style="display: inline-block; border: 1px solid black; width: 40px; height: 40px; text-align: center; vertical-align: middle;"></div> 

2. Point the given numbers, put symbol (<, >, =) and write (less than, greater than, equal to)



3. Compare the numbers and put the correct symbol (<, >, =)

- | | |
|--|--|
| 1. 5 = 5 | 3. 63 5 |
| 2. 27 46 | 4. 88 99 |





Comparing, Ascending and Descending order – Answer the following questions

4. Arrange the numbers in ascending order using “<” symbol

① 78 93 25 16 44

$$16 < 25 < 44 < 78 < 93$$

② 85 46 65 38 29

③ 54 67 73 49 21

④ 33 47 55 43 20

5. Arrange the numbers in descending order using “>” symbol

① 9, 25, 15, 20, 84, 70 →

$$84 > 70 > 25 > 20 > 15 > 9$$

② 11, 66, 44, 55, 33, 99 →

③ 80, 20, 60, 40, 50, 10 →

④ 5, 50, 65, 40, 20, 35 →

6. Arrange the price in ascending and descending order

① ₹50 ₹89 ₹75 ₹40 ₹45 ₹30

Ascending order:

30	40	45	50	75	89
----	----	----	----	----	----

Descending order:

89	75	50	45	40	30
----	----	----	----	----	----

② ₹65 ₹90 ₹35 ₹30 ₹75 ₹70

Ascending order:

--	--	--	--	--	--

Descending order:

--	--	--	--	--	--

