

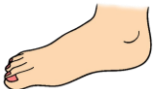



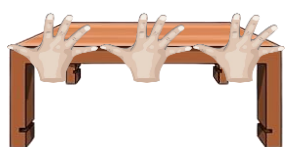
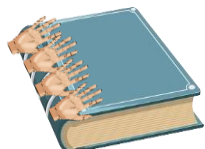



Fill the blanks and write the answer for non standard units



1) Write the correct types of non standard units: (**uniform** or **non – uniform**)

- | | | | | | | | |
|-----|---|---|----------------------|----|--|---|----------------------|
| i |  | - | <input type="text"/> | ii |  | - | <input type="text"/> |
| iii |  | - | <input type="text"/> | iv |  | - | <input type="text"/> |

2) Count and write the length of the objects using **uniform units**:

- | | | |
|-----|--------------------------------|---|
| i | The table is about _____ wide. |  |
| ii | The book is about _____ wide. |  |
| iii | The bridge is _____ wide. |  |

3) Count and write the length of the objects using **non - uniform units**:

- | | | |
|----|---|--|
| i |  | The length of the crayon is _____ match sticks long. |
| ii |  | The box is _____ eraser long. |

